

Total Questions : 35

Time : 1 hr.

PATTERN & MARKING SCHEME

Section	(1) General Awareness	(2) Current Affairs	(3) Life Skills	(4) Achievers Section
No. of Questions	20	5	5	5
Marks per Ques.	1	1	1	2

SYLLABUS

Me and My Surroundings, Plants and Animals, India and the World, Science and Technology, Language and Literature, Earth and Its Environment, Transport and Communication, Sports, Maths Fun, Life Skills (Moral Values, Team Work, Environmental Sensitivity, Communication, Leadership, Time Management), Current Affairs.

Achievers Section : Higher Order Thinking Questions from the above given Syllabus.


1. The special sweet dish shown in the picture is associated with which of the following famous Indian festivals?




Modak

- (A) Holi (B) Durga Puja
(C) Ganesh Chaturthi (D) Baisakhi
2. Which of the following is NOT a Union Territory of India?
(A) Ladakh (B) Chandigarh
(C) Uttarakhand (D) Jammu and Kashmir
3. Which famous scientist explained that the planets revolve around the Sun in an elliptical path?
(A) Johannes Kepler (B) Thomas Edison
(C) Galileo Galilei (D) Albert Einstein
4. Which punctuation mark is used to indicate possession or a contraction?
(A) Colon (B) Full stop
(C) Apostrophe (D) Hyphen
5. If you are facing the West direction and turns 180 degree clockwise, then which direction are you facing now?
(A) North (B) East
(C) South (D) West
6. Select the INCORRECT match.
(A) Basketball – Court (B) Ice hockey – Pitch
(C) Golf – Course (D) All of these


7. Who is the current Minister of Home Affairs of India?



Amit Shah



Rajnath Singh



Dharmendra Pradhan

(D) None of these

8. How can you show respect towards others?

- (A) By being thankless
- (B) By ignoring the feelings and opinions of others
- (C) By listening to others and considering their opinions
- (D) By making fun of others

ACHIEVERS SECTION

9. Identify W, X, Y and Z from the given statements and select the correct option.

W : It is the world's highest plateau, often referred to as the 'Roof of the World'.

X : It is the deepest ocean in the world.

Y : It is one of the countries located in both the continents of Europe and Asia.

Z : It is the largest freshwater lake in the world in terms of volume.

- | W | X | Y | Z |
|---------------------|----------------|--------------|---------------|
| (A) Malwa Plateau | Arctic Ocean | Mongolia | Lake Superior |
| (B) Tibetan Plateau | Pacific Ocean | Türkiye | Lake Baikal |
| (C) Deccan Plateau | Atlantic Ocean | Russia | Lake Victoria |
| (D) Pamir Plateau | Arctic Ocean | Saudi Arabia | Caspian Sea |

10. Refer to the given devices.



Which of these devices will be required to connect to internet with the computer?

- (A) 3 only
- (B) 2 and 3 only
- (C) 3 and 4 only
- (D) 1, 2 and 4 only

ANSWER KEY

1. (C) 2. (C) 3. (A) 4. (C) 5. (B) 6. (B) 7. (A) 8. (C) 9. (B) 10. (A)